

Name _____

Place Value



Counting tens and ones









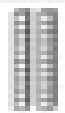







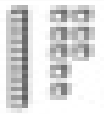

Candy Counter

Write each number.



 = 10  = 1



| | | |
|--|--|--|
|   _____ |   _____ |   _____ |
|   _____ |   _____ |   _____ |
|   _____ |   _____ |   _____ |

Bonus: Write the number 55.
Use this code to show the number in tens and ones.

 = 10  = 1