

Unit 4 Study Guide – Part 1
Graphing and Analyzing Linear Functions
 Learning Goals 4.1, 4.2, 4.3

Good Luck To: _____
 Date: _____
 Period: _____

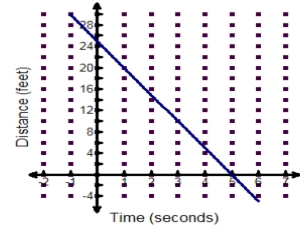
1. The table, graph, and scenario below each depict a relationship between two quantities. Determine whether or not each relationship is **linear**. Explain your reasoning in each case.

a) Steve charges \$8 to show up to do yard work and an additional \$7.50 an hour for each hour he works

b)

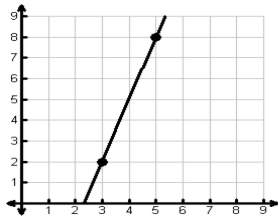
Input (x)	Output (y)
-2	3
-1	3
0	3
1	3
2	3

c)

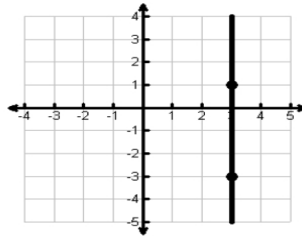


2. Identify the slope of each graph below as either, positive, negative, zero, or undefined.

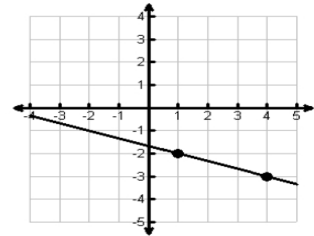
a)



b)



c)



3. Find the slope of the line that contains the given points. Then name another point on the same line.
 (1, 4) and (4, 12)

slope =

additional point (_____ , _____)

4. The local bagel store sells bagels for \$0.49 each.

a) Complete the table at the right.

b) Write an equation from the table.

c) Is this a direct variation, inverse variation or neither? Tell how you know.

Number of bagels (bagels)	Cost (dollars)
0	
3	
6	
9	
12	