













How much...?

5

	£1.15		£25.11		£12.00
	£1.20		£5.00		70p
	£7.80		£10.00		£2.00
	£3.25		£1.00		£15.00

Look at the prices and answer the questions below.

1. How much is the hat?	
2. How much is the big table?	
3. How much is the bag?	
4. How much is the chair?	
5. How much is the cup?	
6. How much is the box?	
7. How much is the calculator?	
8. How much is the bag?	
9. How much is the pen?	
10. How much is the table?	
11. How much is the calculator?	
12. How much is the clock?	