


Using clocks





Write the time.




8 o'clock




half past 10




Draw the hands.




half past 7



1 o'clock



half past 9




half past 6




half past 1



11 o'clock



half past 8



2 o'clock