











Name \_\_\_\_\_

|   |                      |   |                      |
|---|----------------------|---|----------------------|
| <br>Analog clock showing 3:00. The hour hand is on 3 and the minute hand is on 12.   | <input type="text"/> | <br>Analog clock showing 3:00. The hour hand is on 3 and the minute hand is on 12.  | <input type="text"/> |
| <br>Analog clock showing 9:00. The hour hand is on 9 and the minute hand is on 12.   | <input type="text"/> | <br>Analog clock showing 9:00. The hour hand is on 9 and the minute hand is on 12.  | <input type="text"/> |
| <br>Analog clock showing 6:00. The hour hand is on 6 and the minute hand is on 12.  | <input type="text"/> | <br>Analog clock showing 3:00. The hour hand is on 3 and the minute hand is on 12. | <input type="text"/> |
| <br>Analog clock showing 9:00. The hour hand is on 9 and the minute hand is on 12. | <input type="text"/> | <br>Analog clock showing 12:00. Both the hour and minute hands are on 12.         | <input type="text"/> |
| <br>Analog clock showing 6:00. The hour hand is on 6 and the minute hand is on 12. | <input type="text"/> | <br>Analog clock showing 12:00. Both the hour and minute hands are on 12.         | <input type="text"/> |