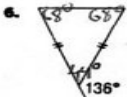
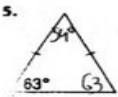
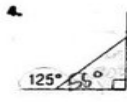
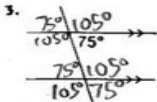
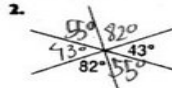
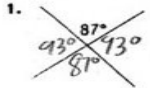


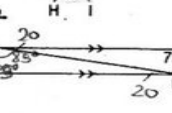
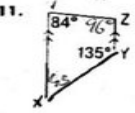
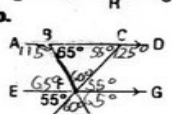
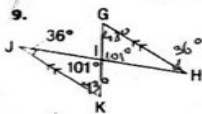
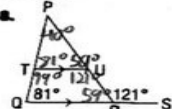
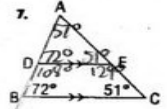
Practice

Find the unknown angle measures.

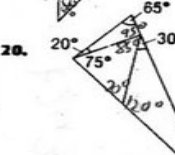
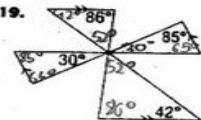
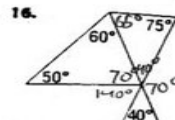
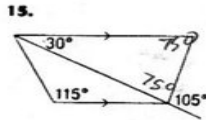
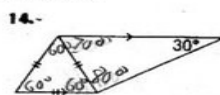
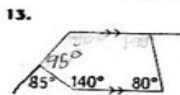


Problems and Applications

Find the unknown angle measures.



Find the unknown angle measures.



'Angles heh? Look easy enough.'

'Hell yeah!'

••D

Fail TreD:

'You sure about that tre? Whatever Good luck with that.'

10 minutes later

'...I told you so.'



'THIS IS SO HARD!'