

Name : _____

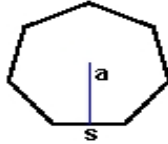
Score : _____

Teacher : _____

Date : _____

Identify and Calculate the Area and Perimeter for each Polygon.

1)



$s = 3.4 \text{ ft}$

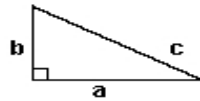
$a = 1.7 \text{ ft}$

Area: _____

Perimeter: _____

Type: _____

2)



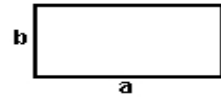
$a = 8.2 \text{ yds}$ $b = 4.6 \text{ yds}$
 $c = 9.4 \text{ yds}$

Area: _____

Perimeter: _____

Type: _____

3)



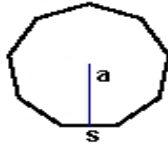
$a = 8.9 \text{ ft}$ $b = 4.4 \text{ ft}$

Area: _____

Perimeter: _____

Type: _____

4)



$s = 3.3 \text{ yds}$

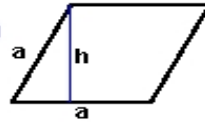
$a = 1.65 \text{ yds}$

Area: _____

Perimeter: _____

Type: _____

5)



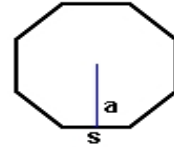
$a = 6.6 \text{ cm}$ $h = 5.98 \text{ cm}$

Area: _____

Perimeter: _____

Type: _____

6)



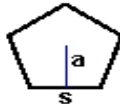
$s = 7.6 \text{ mm}$
 $a = 3.29 \text{ mm}$

Area: _____

Perimeter: _____

Type: _____

7)



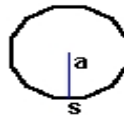
$s = 5.4 \text{ mm}$
 $a = 2.57 \text{ mm}$

Area: _____

Perimeter: _____

Type: _____

8)



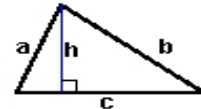
$s = 2.5 \text{ cm}$
 $a = 1.25 \text{ cm}$

Area: _____

Perimeter: _____

Type: _____

9)



$a = 5.8 \text{ inches}$ $b = 8.68 \text{ inches}$
 $c = 8.9 \text{ inches}$ $h = 5.4 \text{ inches}$

Area: _____

Perimeter: _____

Type: _____