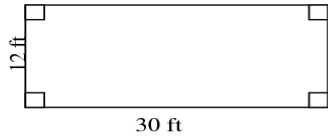


Name _____ Period _____ Date _____

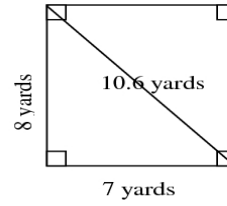
Perimeter and Circumference

For all of the problems, find the perimeter.

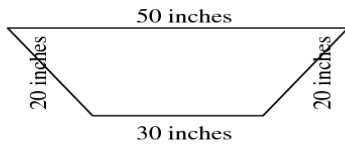
1) Perimeter = _____




2) Perimeter = _____



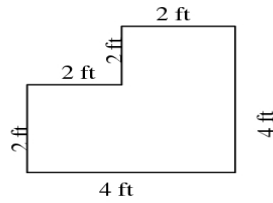
3) Perimeter = _____



4) Perimeter = _____



5) Perimeter = _____



6) Perimeter = _____

