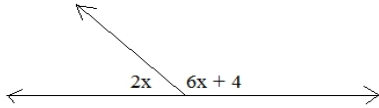


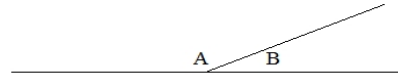
Angles Properties Quiz

1) Find x :

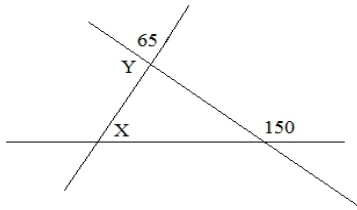


2) The ratio of A to B is $7:2$

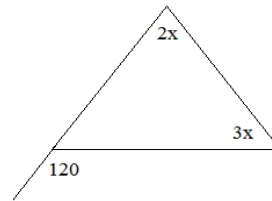
What is the measure of angle B ?



3) Determine X and Y



4) What is the measure of the smallest angle?



5) Given: l and m are parallel.
Find the angles:

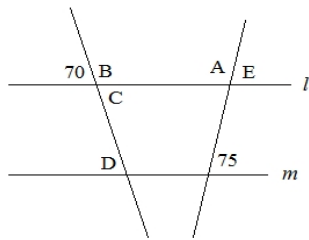
A:

B:

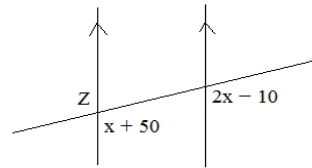
C:

D:

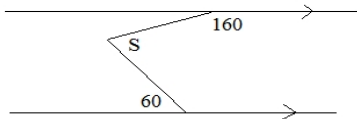
E:



6) What is the measure of angle Z ?



7) Find S :



8) Find x :

