

Find the Missing Addend


Name: _____



$4 + _ = 10$




$9 + _ = 11$



$_ + 7 = 8$



$4 + _ = 9$



$_ + 9 = 14$




$4 + _ = 8$




$5 + _ = 12$



$6 + _ = 9$




$_ + 5 = 10$



$_ + 3 = 12$




$7 + _ = 14$




$_ + 2 = 12$



$9 + _ = 13$



$_ + 4 = 12$




$_ + 2 = 13$



$11 + _ = 12$



$7 + _ = 8$



$_ + 6 = 6$



$7 + _ = 12$



$1 + _ = 11$