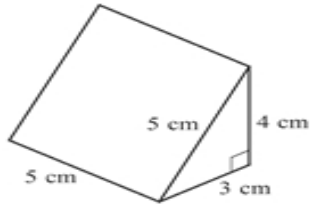
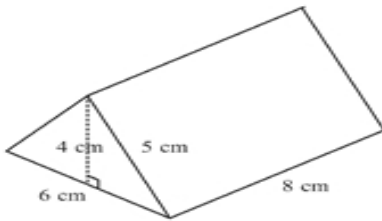


Surface Area of Triangular Prisms

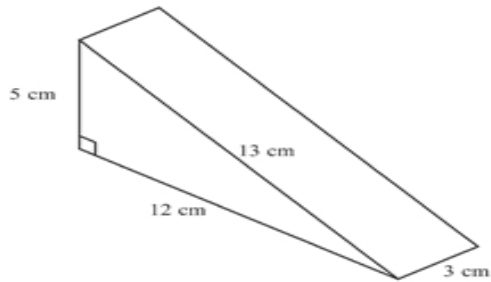
Name _____
Date _____



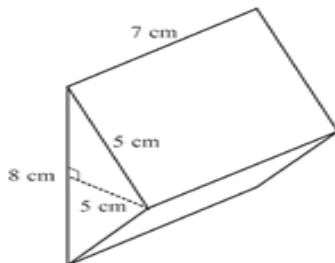
Area of triangles = _____
 Area of base rectangle = _____
 Area of back rectangle = _____
 Area of sloping side rectangle = _____
Surface Area = _____



Area of triangles = _____
 Area of base rectangle = _____
 Area of 2 sloping sides rectangle = _____
Surface Area = _____



Area of triangles = _____
 Area of base rectangle = _____
 Area of back rectangle = _____
 Area of sloping side rectangle = _____
Surface Area = _____



Area of triangles = _____
 Area of base rectangle = _____
 Area of 2 sloping sides rectangle = _____
Surface Area = _____