




Name: _____


Can you tell the time to the nearest 5 minutes?
Worksheet 2

1




4:00

2



8:35

3




2:00

4




5




4:35

6




12:25

7



8:45

8




12:05

9




9:55

10



12:15

11



7:00

12

