

Name: _____



Date: _____

Telling Time

For each time, you need to either draw in the hands or write the time.



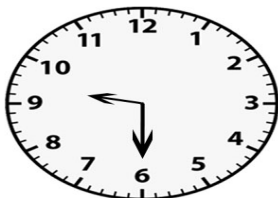

11:45



5:30



7:20



4:00



9:30