

Name : _____

Score : _____

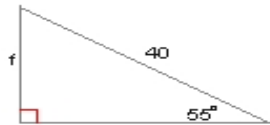
Teacher : _____

Date : _____

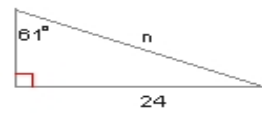
Solving Right Triangles

Find the side indicated by a variable. Round to the nearest tenth.

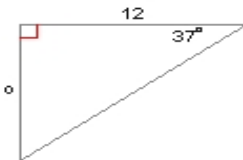
1) $f =$ _____



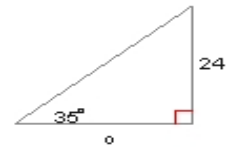
2) $y =$ _____



3) $o =$ _____



4) $o =$ _____



5) $j =$ _____



6) $v =$ _____

