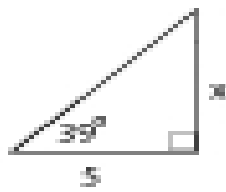


Algebra 1 Worksheet

Name _____

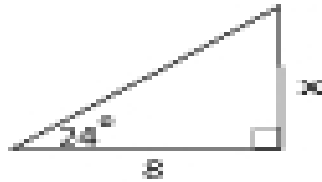
Find the missing side.
Round to the nearest tenth.

1.



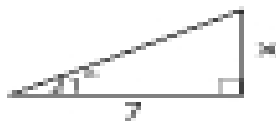
Answer: _____

2.



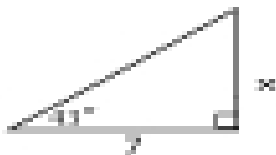
Answer: _____

3.



Answer: _____

4.



Answer: _____