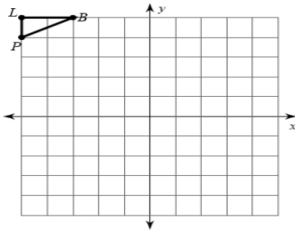


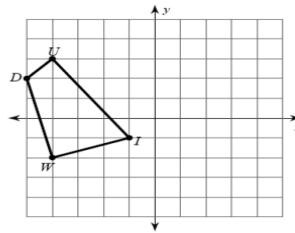
9.3 Rotations Practice Worksheet

Graph the rotation of each figure over the given lines.

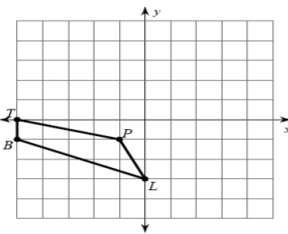
1. Reflect figure over y-axis and then over x-axis



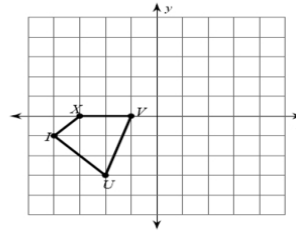
2. Reflect figure over $y = 1$ and then over y-axis



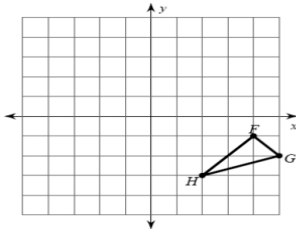
3. Reflect figure over $y = 1$ then over y-axis



4. Reflect figure over $x = 1$ then over $y = 1$



5. Reflect figure over $x = 2$ and then over $y = -1$



6. Reflect figure over $y = -3$ and then over $x = 1$

