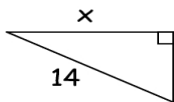


Trig Ratios Worksheet
 "Solving Right Triangles"

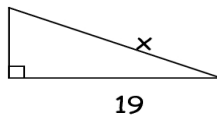
Name _____

Find all segments to the nearest tenth, and angles to the nearest degree. Solve for x in each problem.

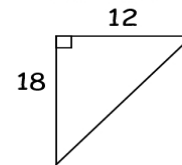
1. _____



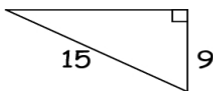
2. _____



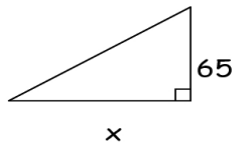
3. _____



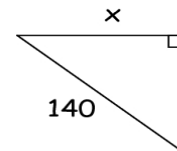
4. _____



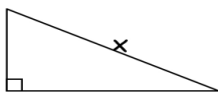
5. _____



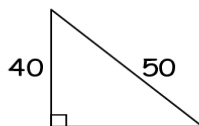
6. _____



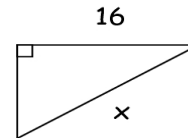
7. _____



8. _____



9. _____



10. _____

