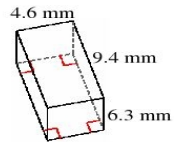


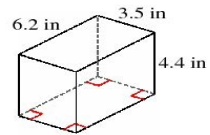
## Volume and Surface Area of Rectangular Prisms (G)

Instructions: Find the volume and surface area for each rectangular prism.

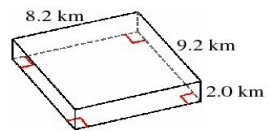
1)



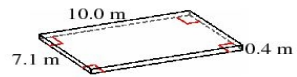
2)



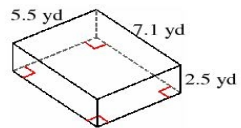
3)



4)



5)



6)

