
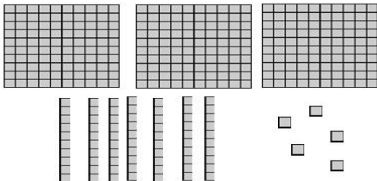
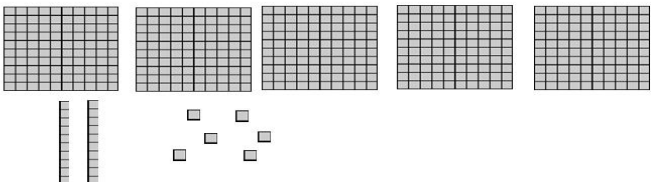
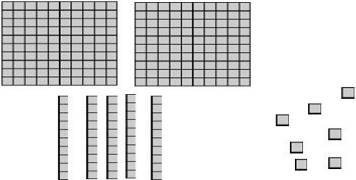
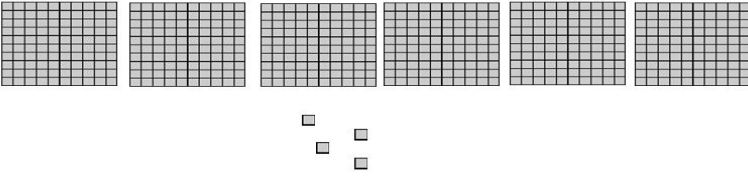


 Name: _____

CCSS 2.NBT.3 Read and write numbers to 1000 using base-ten numerals, number names, and expanded form.

Place Value Blocks

 Directions: Write the number shown by the blocks using digits.

| | |
|--------------------------------------------------------------------------------------------|-------------------|
| 1.  | <u>375</u> |
| 2.  | <u> </u> |
| 3.  | <u> </u> |
| 4.  | <u> </u> |

____ I double checked my work.