




Name: \_\_\_\_\_

### Stuffed Animals - Pictograph

Stuffed Animals Owned By Students

Name	Number of Stuffed Animals
Sara	
Billy	
Jess	

 = 2 stuffed animals

1. How many stuffed animals does Sara have? \_\_\_\_\_
2. How many stuffed animals does Jess have? \_\_\_\_\_
3. How many stuffed animals does Billy have? \_\_\_\_\_
4. Who has the most stuffed animals? \_\_\_\_\_
5. Who has the fewest stuffed animals? \_\_\_\_\_
6. Does Jess or Sara have more stuffed animals? \_\_\_\_\_
7. Who has six stuffed animals? \_\_\_\_\_