

Name : \_\_\_\_\_

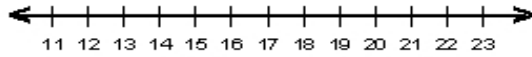
Score : \_\_\_\_\_

Teacher : \_\_\_\_\_

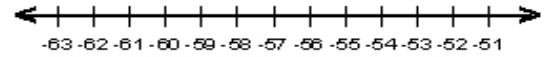
Date : \_\_\_\_\_

### Solve the Inequalities

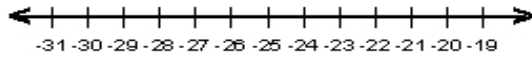
1)  $\frac{x}{3} \geq 5$



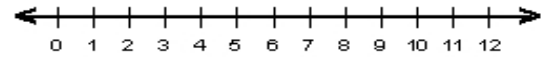
6)  $-8 > \frac{s}{7}$



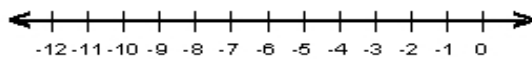
2)  $-13 < \frac{y}{2}$



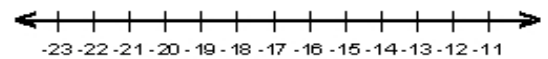
7)  $7n > 42$



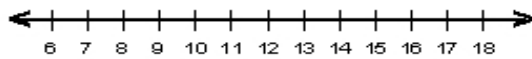
3)  $-4b \geq 28$



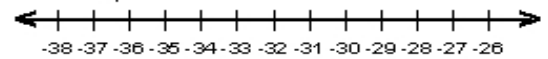
8)  $91 \leq -7q$



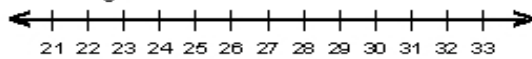
4)  $52 \geq 4d$



9)  $\frac{v}{4} \geq -8$



5)  $\frac{h}{3} < 10$



10)  $-11 < \frac{k}{4}$

