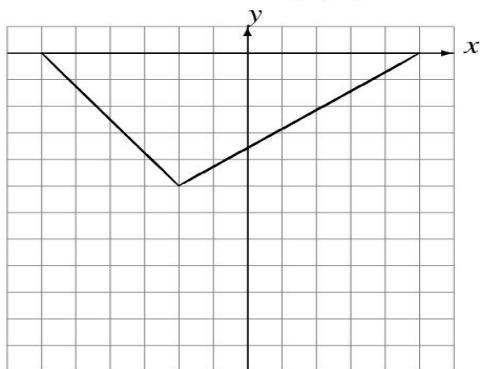


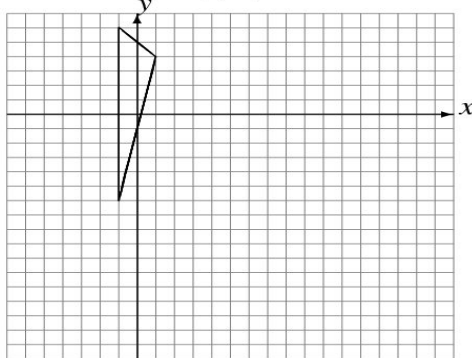
Rotations (A)

Draw the rotated image.

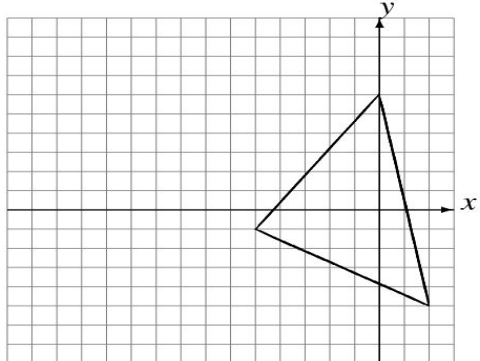
Rotate 90° clockwise about $(-1, -5)$.



Rotate 180° about $(5, -5)$.



Rotate 90° counterclockwise about $(-5, -3)$.



Rotate 180° about $(2, 1)$.

