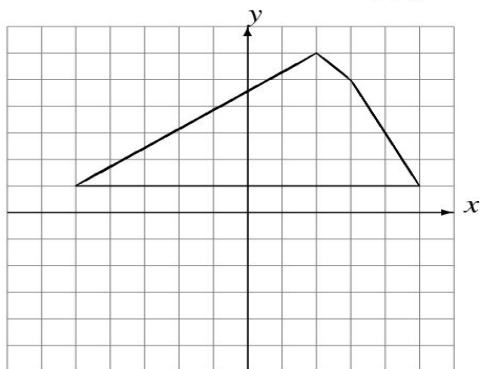


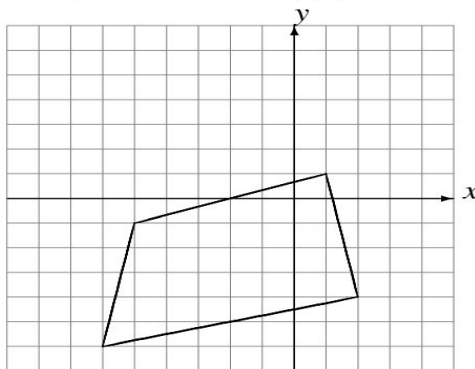
Rotations (D)

Draw the rotated image.

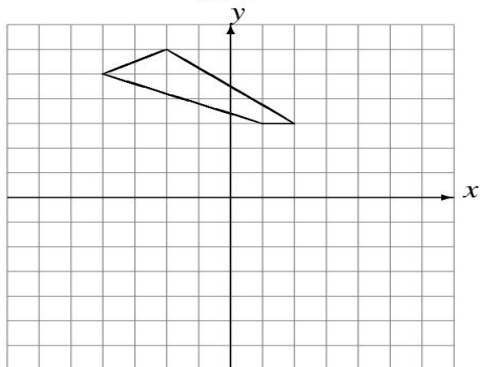
Rotate 90° counterclockwise about $(0, 0)$.



Rotate 90° clockwise about $(0, 0)$.



Rotate 180° about $(0, 0)$.



Rotate 90° clockwise about $(0, 0)$.

