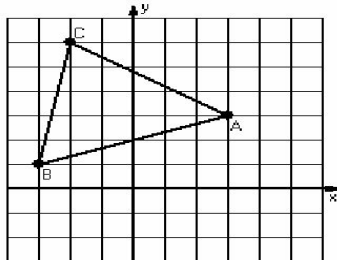


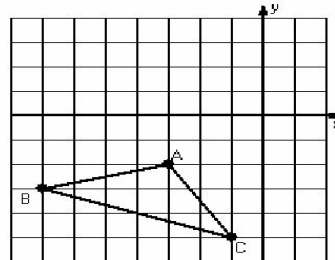
Rotations (A)

Instructions: Draw and label the rotated image for each triangle.
Label the center of rotation.

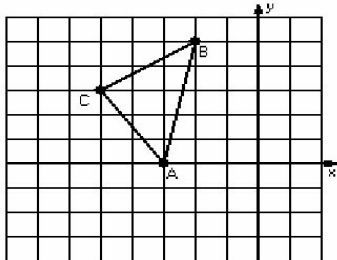
1) Rotation 90° counterclockwise, center $R(1,3)$



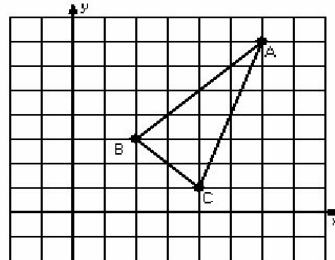
2) Rotation 180° , center $R(-4,-2)$



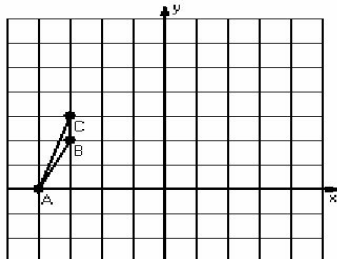
3) Rotation 90° clockwise, center $R(-3,2)$



4) Rotation 90° counterclockwise, center $R(3,3)$



5) Rotation 180° , center $R(-2,2)$



6) Rotation 90° clockwise, center $R(-2,-5)$

