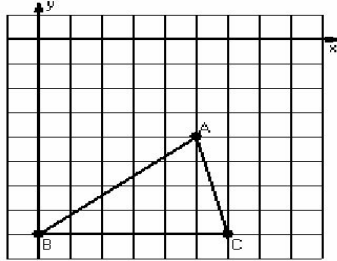


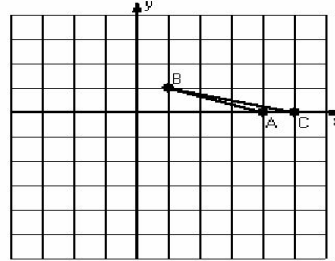
Rotations (E)

Instructions: Draw and label the rotated image for each triangle.
Label the center of rotation.

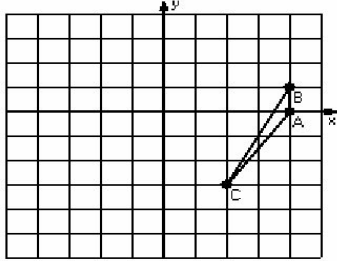
1) Rotation 90° counterclockwise, center $R(2,-5)$



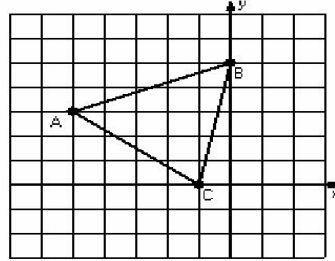
2) Rotation 180° , center $R(2,-2)$



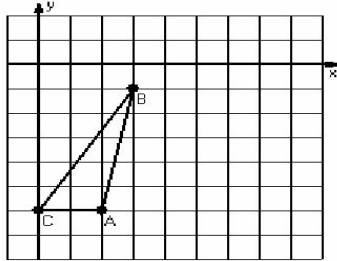
3) Rotation 90° clockwise, center $R(2,2)$



4) Rotation 90° counterclockwise, center $R(-2,2)$



5) Rotation 180° , center $R(2,4)$



6) Rotation 90° clockwise, center $R(0,4)$

