






Name: _____

Subtracting up to 10

Subtract and write the correct number in the box.

	$\begin{array}{r} 3 \\ - 1 \\ \hline \dots \end{array}$
	$\begin{array}{r} 4 \\ - 1 \\ \hline \dots \end{array}$
	$\begin{array}{r} 5 \\ - 1 \\ \hline \dots \end{array}$
	$\begin{array}{r} 4 \\ - 2 \\ \hline \dots \end{array}$
	$\begin{array}{r} 3 \\ - 2 \\ \hline \dots \end{array}$