



Name: _____

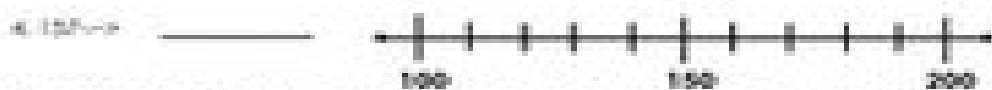

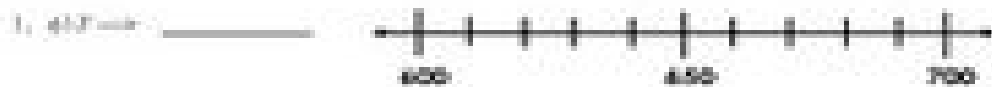
Date: _____

Using Place Value to Round Numbers

Use the number line to help you round the numbers to the nearest 10.



Use the number line to help you round the numbers to the nearest 100.



On the back of this page, write about how you round numbers to the nearest ten. (L.4.NF.1)