

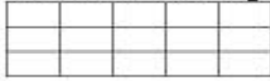
Name: \_\_\_\_\_

### Math Practice: Area (3.MD.5)

Monday

Write the number of square units.

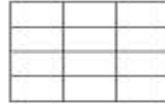
1 Square Unit



\_\_\_\_\_ square units



\_\_\_\_\_ square units

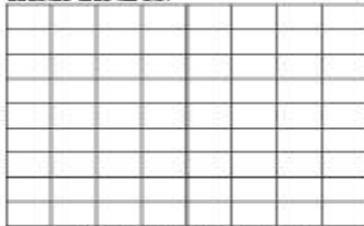


\_\_\_\_\_ square units

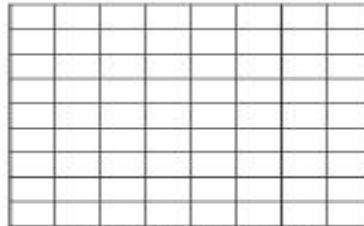


\_\_\_\_\_ square units

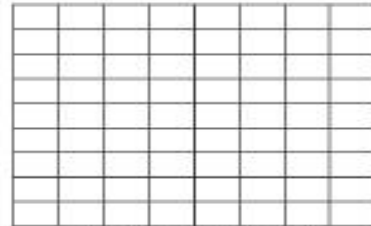
Shade the area.



Shade 24 square units

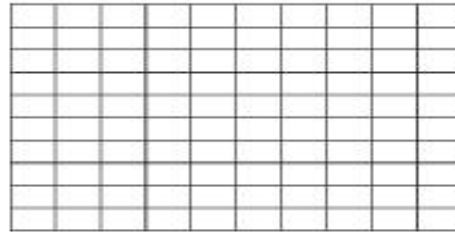
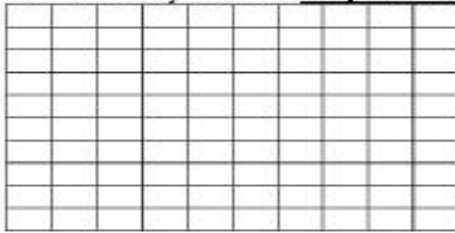


Shade 18 square units

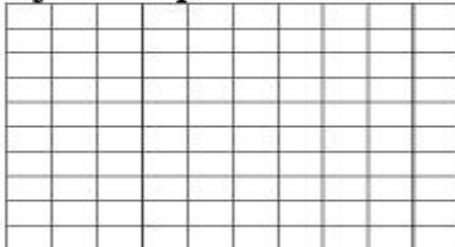


Shade 36 square units

Show 2 different ways to shade 64 square units.



Using the grid section below, draw a rectangular representation of 40 square units. Explain your drawing on the lines provided.



---

---

---

---

---

---

---

---