











Classify Polygons

Circle the shape name, and write the number of sides.

 Octagon Pentagon Star Square Number of Sides: _____	 Octagon Rectangle Star Hexagon Number of Sides: _____
 Rectangle Triangle Pentagon Star Number of Sides: _____	 Triangle Rectangle Star Octagon Number of Sides: _____
 Rectangle Triangle Pentagon Hexagon Number of Sides: _____	 Pentagon Octagon Triangle Rectangle Number of Sides: _____
 Rectangle Pentagon Star Triangle Number of Sides: _____	 Hexagon Pentagon Star Square Number of Sides: _____
 Triangle Rectangle Pentagon Octagon Number of Sides: _____	 Pentagon Hexagon Square Rectangle Number of Sides: _____