


How many **groups** of 10 blocks are in each set?




\_\_\_\_\_

groups



\_\_\_\_\_

groups



\_\_\_\_\_

groups

How many **groups** of 1 blocks are in each set?




\_\_\_\_\_

groups



\_\_\_\_\_

groups




\_\_\_\_\_

groups



\_\_\_\_\_

groups



\_\_\_\_\_


groups

\_\_\_\_\_

groups

\_\_\_\_\_

total



\_\_\_\_\_

groups




\_\_\_\_\_

groups

\_\_\_\_\_

total



\_\_\_\_\_

groups



\_\_\_\_\_

groups

\_\_\_\_\_

total