


Name _____

© Anne Parrott • The Parrott Girls 2012

More and Less




Directions: Count the popsicle sticks and solve the problems.




1 more is _____
10 more is _____
10 less is _____



1 more is _____
10 more is _____
10 less is _____



1 more is _____
10 more is _____
10 less is _____



1 more is _____
10 more is _____
10 less is _____



1 more is _____
10 more is _____
10 less is _____



1 more is _____
10 more is _____
10 less is _____



1 more is _____
10 more is _____
10 less is _____



1 more is _____
10 more is _____
10 less is _____



1 more is _____
10 more is _____
10 less is _____