



Name _____ Date _____

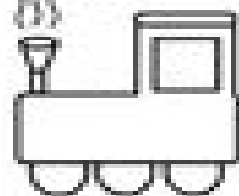


Write each missing number.


1									10
---	--	--	--	--	--	--	--	--	----



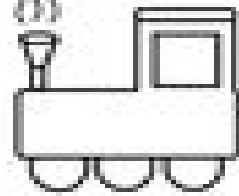
11									20
----	--	--	--	--	--	--	--	--	----



21									30
----	--	--	--	--	--	--	--	--	----



31									40
----	--	--	--	--	--	--	--	--	----



41									50
----	--	--	--	--	--	--	--	--	----