










K.OA.A.4

Name: \_\_\_\_\_

# Making 10!

Count how many more to make 10.  
Write the number to make 10.



|   |   |   |
|---|---|---|
| <br>$4 + \square = 10$   | <br>$7 + \square = 10$   | <br>$3 + \square = 10$   |
| <br>$6 + \square = 10$   |                         | <br>$5 + \square = 10$   |
| <br>$9 + \square = 10$ | <br>$2 + \square = 10$ | <br>$8 + \square = 10$ |