




Name: \_\_\_\_\_


## Be a Clock Wizard - Worksheet 1

Find the time to the nearest minute for each clock.


1.




2.




3.




4.




5.




6.




7.




8.




9.



10.



11.



12.

