




Name: _____

Can you tell the time to the nearest 5 minutes?
Worksheet 2

1




12:00

2




3



4



5



6:00

6



7




8



9



10



11



12

