
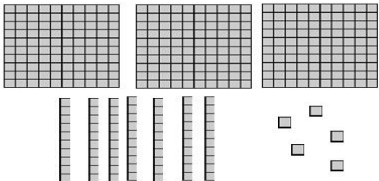
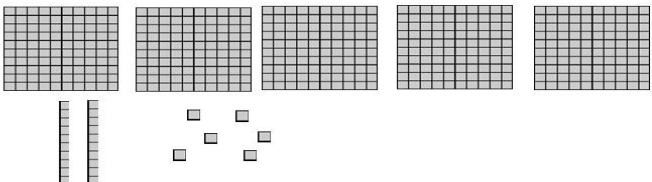
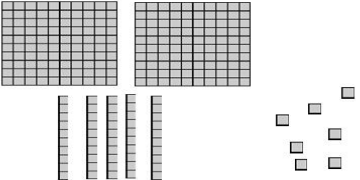
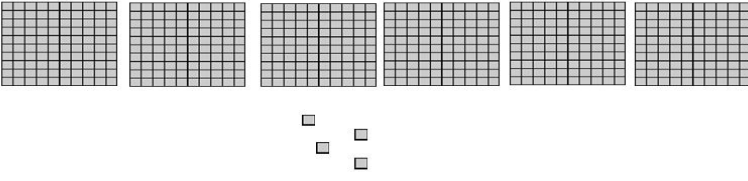


Name: \_\_\_\_\_

CCSS 2.NBT.3 Read and write numbers to 1000 using base-ten numerals, number names, and expanded form.

## Place Value Blocks

 Directions: Write the number shown by the blocks using digits.

<p>1.</p> 	<p>375</p> <hr/>
<p>2.</p> 	<hr/>
<p>3.</p> 	<hr/>
<p>4.</p> 	<hr/>

\_\_\_\_ I double checked my work.