

CHECK YOUR PROGRESS
 SCHOOL _____
 NAME _____

DATE _____
 SUBJECT: MATHEMATICS
 CHAPTER _____

DATE _____
 TEACHER _____
 GRADE _____




10) Read the first three lines. Then complete the sentence with the correct names or positions.

Joe is the Champion (Harry is third, and Carl is in fifth position. Peter is fourth position) Joe is between Jim and Harry. Harry is in front of Peter. Carl is behind Carl and in front of Bob. Ted is between Harry and Carl, and Tom is behind Bob.

Write the name of the person in the correct position.


	1. _____ is first		6. _____ is sixth
	2. _____ is second		7. _____ is seventh
	3. Harry is _____		8. _____ is eighth
	4. _____ is fourth		9. _____ is ninth
	5. Carl is _____		10. _____ is tenth



11) Write the numbers in figures.











100	1000	10000	100000	1000000
1000	10000	100000	1000000	10000000
10000	100000	1000000	10000000	100000000

12) See the first four numbers in the sequence.



1	2	3	4	5	6
7	8	9	10	11	12
13	14	15	16	17	18
19	20	21	22	23	24
25	26	27	28	29	30

13) Circle the number you get when you multiply 10 by 10.

									
100	1000	10000	100000	1000000	100	1000	10000	100000	1000000