

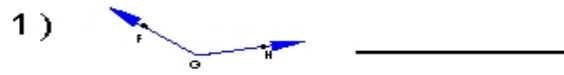
Name : _____

Score : _____


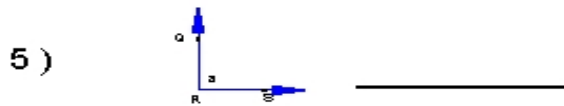
Teacher : _____

Date : _____

Name the vertex and sides of each angle.



Name each angle in four ways.



Name all the angles that have V as a vertex.

