

Name : _____

Score : _____

Teacher : _____

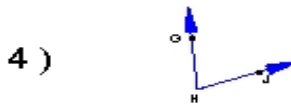
Date : _____

Name the vertex and sides of each angle.

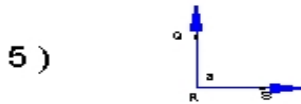


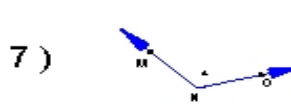


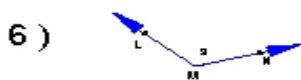


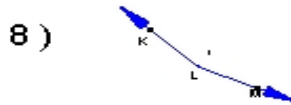


Name each angle in four ways.









Name all the angles that have V as a vertex.

