


Multiplication Rows and Columns

Name: _____ Class: _____

Write the multiplication sentences for the rows and columns.



_____ x _____ = _____
_____ x _____ = _____



_____ x _____ = _____
_____ x _____ = _____



_____ x _____ = _____
_____ x _____ = _____



_____ x _____ = _____
_____ x _____ = _____



_____ x _____ = _____
_____ x _____ = _____




_____ x _____ = _____
_____ x _____ = _____




_____ x _____ = _____
_____ x _____ = _____



_____ x _____ = _____
_____ x _____ = _____



_____ x _____ = _____
_____ x _____ = _____



_____ x _____ = _____
_____ x _____ = _____



_____ x _____ = _____
_____ x _____ = _____



_____ x _____ = _____
_____ x _____ = _____