













Name _____ Date _____

Plenty of Room

Choose the unit you would use to measure the liquid in each item.
Write "ml" for milliliter.
Write "L" for liter.



1.  _____	2.  _____	3.  _____	4.  _____
5.  _____	6.  _____	7.  _____	8.  _____
9.  _____	10.  _____	11.  _____	12.  _____

