

Name _____


Quarters

Learn how to count groups of quarters.


Count the quarters in each group, and write each total on the line.

Remember! Each quarter is worth 25¢.

1.




2.



3.



4.



5.

