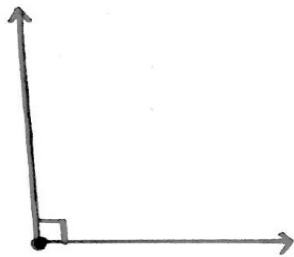


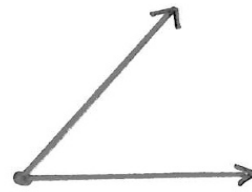
---

Draw an angle using the given measure.

1.  $90^\circ$




2.  $43^\circ$



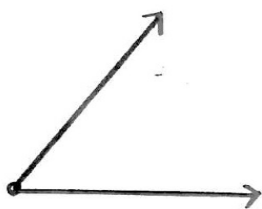
3.  $143^\circ$



4.  $112^\circ$



5.  $54^\circ$



6.  $173^\circ$

