



Name: _____

1.MD.B.3

Valen-time


Draw the correct time on each clock.



3:00



7:00




1:00



11:00



4:00



9:00



6:00



10:00



12:00