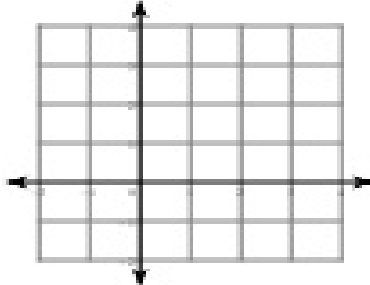
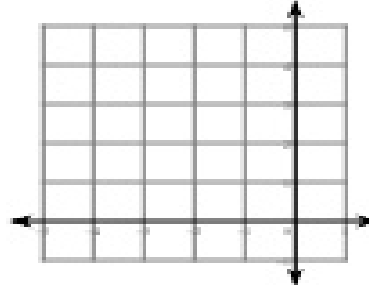


Sketch the graph of each function. Plot at least 5 Points each.

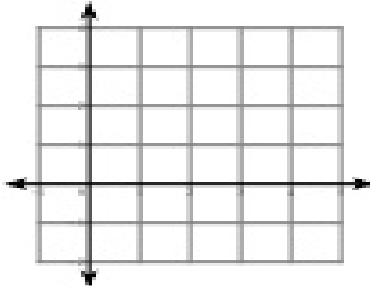
1)  $f(x) = x^2 - 4x + 3$



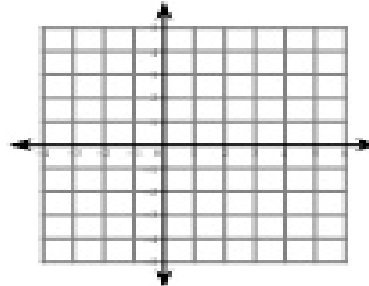
2)  $f(x) = -x^2 - 4x$



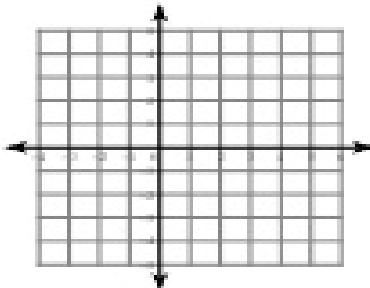
3)  $f(x) = -x^2 + 2x + 2$



4)  $f(x) = 2x^2 + 4x - 2$



5)  $f(x) = -2x^2 + 8x - 4$



6)  $f(x) = 2x^2 - 8x + 4$

