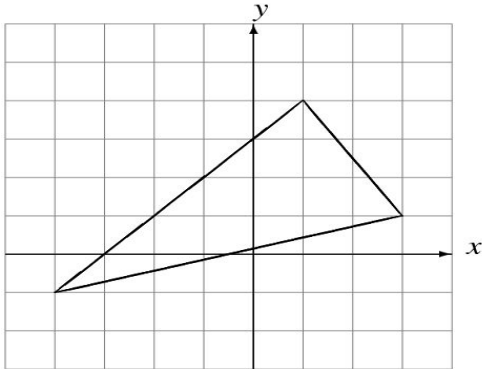


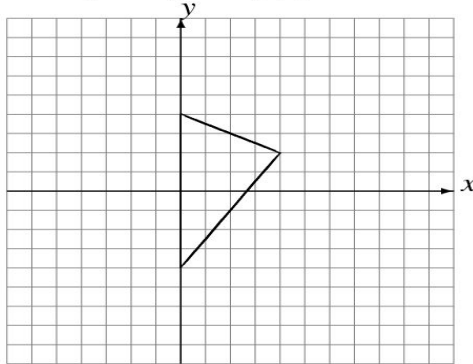
Dilations (D)

Draw the dilated image.

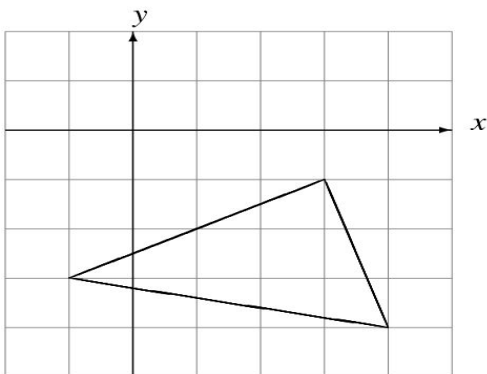
Dilate by $\frac{1}{2}$ using center $(-2, 2)$.



Dilate by 2 using center $(2, 0)$.



Dilate by $\frac{1}{2}$ using center $(3, 1)$.



Dilate by $\frac{1}{4}$ using center $(1, -2)$.

