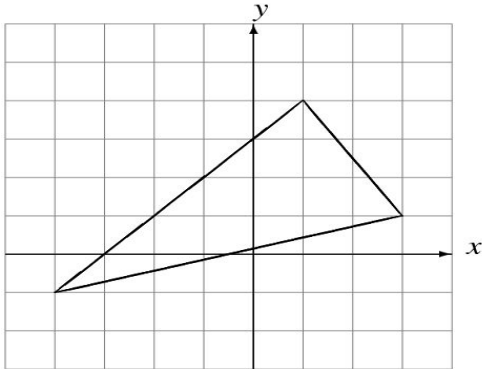


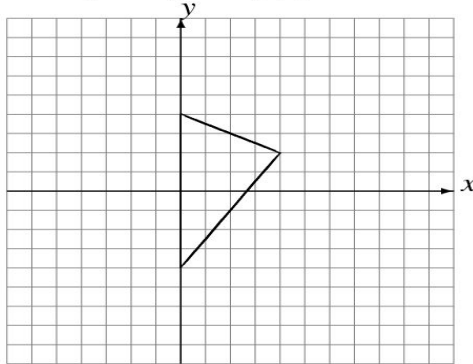
## Dilations (D)

Draw the dilated image.

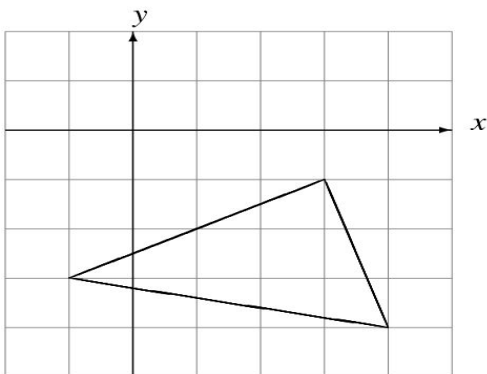
Dilate by  $\frac{1}{2}$  using center  $(-2, 2)$ .



Dilate by 2 using center  $(2, 0)$ .



Dilate by  $\frac{1}{2}$  using center  $(3, 1)$ .



Dilate by  $\frac{1}{4}$  using center  $(1, -2)$ .

