


Telling Time

Worksheet


Name _____

Date _____


Write the time below each clock!



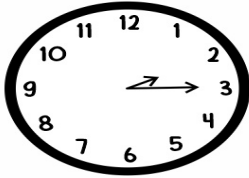
:
.....




:
.....




:
.....




:
.....



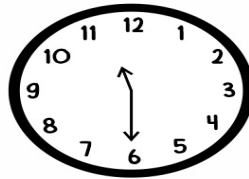
:
.....



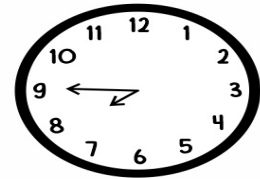
:
.....




:
.....




:
.....




:
.....



:
.....



:
.....



:
.....