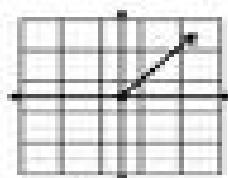
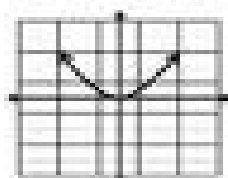


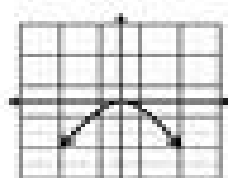
**KEY** Write the Domain and Range for each graph. (version 2)



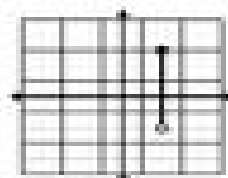
D:  $[0, \infty)$   
R:  $[0, \infty)$




D:  $(-\infty, \infty)$   
R:  $[1, \infty)$



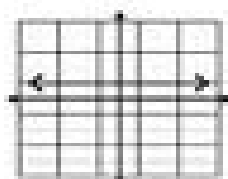
D:  $(-\infty, \infty)$   
R:  $(-\infty, 1]$



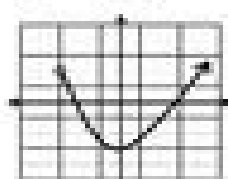
D:  $\{1\}$   
R:  $[1, 2]$




D:  $[-1, 1]$   
R:  $[-1, 1]$



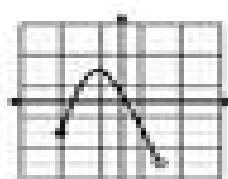
D:  $(-\infty, \infty)$   
R:  $\{1\}$



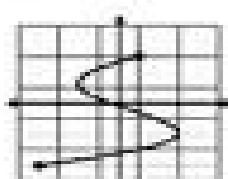
D:  $(-\infty, \infty)$   
R:  $[-1, \infty)$



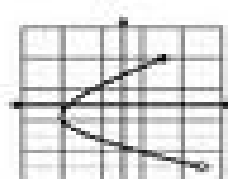
D:  $\{1\}$   
R:  $[-1, 2]$



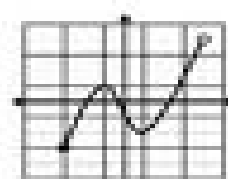
D:  $[-1, 1]$   
R:  $[-1, 1]$



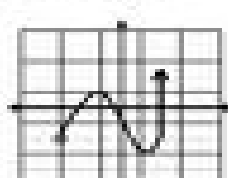
D:  $[-1, 2]$   
R:  $[-1, 1]$



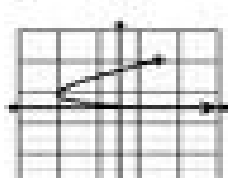
D:  $[-1, 2]$   
R:  $[-1, 1]$



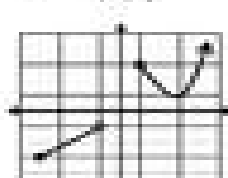
D:  $[-1, 2]$   
R:  $[-1, 1]$



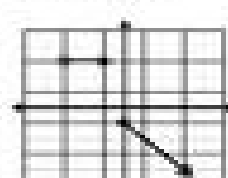
D:  $[-1, 2]$   
R:  $[-1, \infty)$



D:  $[1, \infty)$   
R:  $[2, 1]$



D:  $[-1, -1] \cup [1, \infty)$   
R:  $[-1, -1] \cup [1, \infty)$



D:  $[-1, -1] \cup [0, \infty)$   
R:  $(-\infty, -1] \cup [1, 1]$