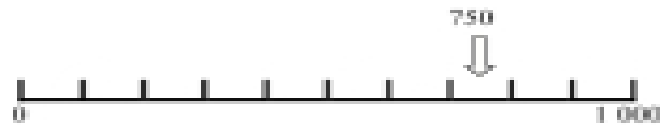


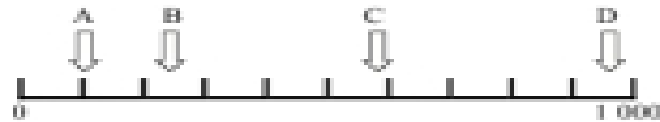
With these questions be prepared to say how you got your answers.

1. This line shows the numbers up to 1 000 divided into hundreds. Draw an arrow to show the following numbers approximately (the first has been done for you).


500, 150, 680, 370, 220



2. Where are the arrows approximately pointing to on this line?



3. Where are the arrows approximately pointing to on this line?



4. Where are the arrows approximately pointing to on this line?

